


NAME: _____


START




\downarrow $\times (-2)$




\downarrow $\times (+3)$




\downarrow $\times (-3)$



\downarrow $\div (+2)$




\downarrow $\times (+5)$



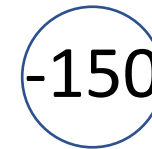
\rightarrow $\div (-9)$




CHECKPOINT




\rightarrow $\div (+2)$




\downarrow $\times (-5)$




\downarrow $\div (-5)$




\downarrow $\div (-2)$



\downarrow $\times (-4)$



\downarrow $\div (-3)$



END