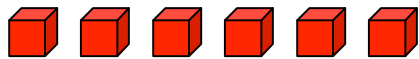




Name: \_\_\_\_\_

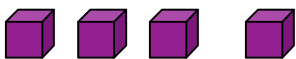

For each example, circle the 2 groups of cubes that make 10 and then solve the addition problem:



$$4 + 3 + 6 = \underline{\hspace{2cm}}$$

---

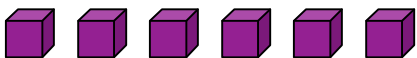

---



$$5 + 5 + 4 = \underline{\hspace{2cm}}$$

---

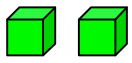
---



$$9 + 1 + 6 = \underline{\hspace{2cm}}$$

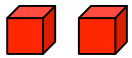
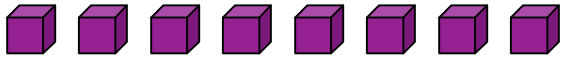
---

---



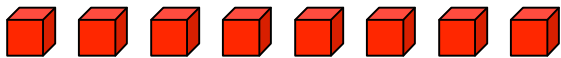

$$2 + 3 + 7 = \underline{\hspace{2cm}}$$

---



$$5 + 2 + 8 = \underline{\hspace{2cm}}$$

---



$$5 + 8 + 5 = \underline{\hspace{2cm}}$$

---