






Names: _____

comparing fraction challenge


Round #	Player 1		Player 2
1.	<input type="text"/> <hr/> <input type="text"/>		<input type="text"/> <hr/> <input type="text"/>
2.	<input type="text"/> <hr/> <input type="text"/>		<input type="text"/> <hr/> <input type="text"/>
3.	<input type="text"/> <hr/> <input type="text"/>		<input type="text"/> <hr/> <input type="text"/>
4.	<input type="text"/> <hr/> <input type="text"/>		<input type="text"/> <hr/> <input type="text"/>
5.	<input type="text"/> <hr/> <input type="text"/>		<input type="text"/> <hr/> <input type="text"/>

Round #


Player 1

Player 2


1.




2.



3.



4.



5.

